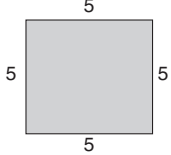
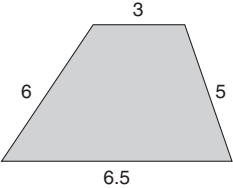
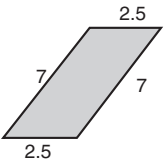
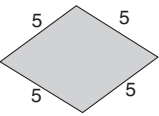


Names of the Shape



<p>Circle all correct names for each shape. The side lengths are labeled in units.</p>	<p>Explain your thinking:</p>
<p>1.</p>  <p>quadrilateral square rectangle rhombus parallelogram trapezoid</p>	
<p>2.</p>  <p>quadrilateral square rectangle rhombus parallelogram trapezoid</p>	
<p>3.</p>  <p>quadrilateral square rectangle rhombus parallelogram trapezoid</p>	
<p>4.</p>  <p>quadrilateral square rectangle rhombus parallelogram trapezoid</p>	